

UNIVERSITY OF CALCUTTA
CITY COLLEGE CENTRE
 Zoology Honours
 Paper: CC5-11-P
 [ZOOA-CC5-11-P Examination 2020; Online]
Ecology

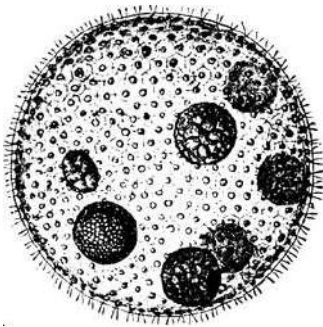
Full Marks: 30

Time – 2 hours

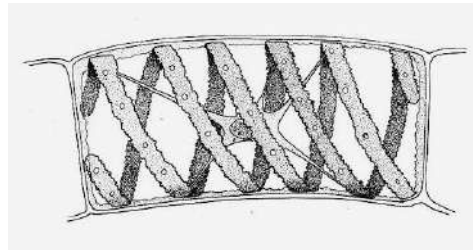
The figures in the margin indicate full marks

**Q. 1. Identify the following planktons and write two salient features, one from 'A' and one from 'B'.
 [1+(1+1)] X 2 = 6**

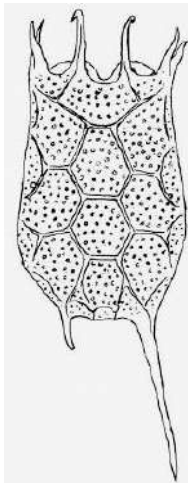
A.



OR



B.



OR



Q. 2. Write the Principle, Reactions, Requirements and Procedure of estimation of Dissolved Oxygen through Modified Winkler's Iodometric Method, if water sample is being provided. 3+3+3+3 = 12

Q. 3. Identify any two of the following animals, mentioning their distribution, habitat, IUCN status and ecological significance. (1+1+1+1+2) X 2 = 12

A.



B.



C.

